

Test Booklet No.
টেস্ট বুকলেট সংখ্যা

Subject : GENERAL TEST


Test Booklet Code
টেস্ট বুকলেট কোড

Code : 501 EAS

Medium : English and Assamese

(Do not open this Test Booklet until you are asked to do so)

(অনুমতি নোপোৱালৈকে এই বুকলেট নখুলিবা)



Time Allowed : 60 minutes নির্ধাৰিত সময় : 60 মিনিট	Maximum Marks : 250 সৰ্বোচ্চ নম্বৰ : 250	Total Questions : 60 মুঠ প্ৰশ্ন : 60	Number of questions to be answered : 50 উত্তৰ কৰিবলগীয়া প্ৰশ্নৰ সংখ্যা : 50
--	---	---	---

Kindly read the Instructions given on this Page and Back Page carefully before attempting this Question Paper.

এই প্ৰশ্নকাকত উত্তৰ কৰাৰ আগতে পৃষ্ঠাত দিয়া নিৰ্দেশনাসমূহ ভালকৈ পঢ়িবা।

Important Instructions for the Candidates :

1. This Test Booklet contains 60 questions printed in English and Assamese. Out of these, the candidate is required to answer any 50 questions. If a candidate answers more than 50 questions, the first 50 answered questions will be considered for evaluation.
2. When you are given the OMR Answer Sheet, fill in your particulars on it carefully with blue/black ball point pen only.
3. Use only Blue/Black Ball Point Pen for marking responses.
4. The CODE for this Test Booklet is A. Make sure that the CODE printed on the OMR Answer Sheet is the same as that on this Test Booklet. Also ensure that your Test Booklet No. and OMR Answer Sheet No. are exactly the same. In case of discrepancy, the candidate should immediately report the matter to the Invigilator for replacement of both the Test Booklet and the OMR Answer Sheet. No claim in this regard will be entertained after five minutes from the start of the examination.
5. Before attempting the question paper kindly check that this Test Booklet has total 28 pages and OMR Answer Sheet consists of one sheet. At the start of the examination within first five minutes, candidates are advised to ensure that all pages of Test Booklet and OMR Answer Sheet are properly printed and they are not damaged in any manner.
6. Each question has four answer options. Out of these four options choose the **MOST APPROPRIATE OPTION** and darken/blacken the corresponding circle on the OMR Answer Sheet with a Blue/Black Ball Point Pen.
7. Five (5) marks will be given for each correct answer. One (1) mark will be deducted for each incorrect answer. If more than one circle is found darkened/blackened for a question, then it will be considered as an incorrect answer. Unanswered questions will be given no mark.

P.T.O.

ছাত্ৰ-ছাত্ৰীৰ বাবে গুৰুত্বপূৰ্ণ নিৰ্দেশনাসমূহ :

1. টেস্ট বুকলেটখনত 60 টা প্ৰশ্ন অসমীয়া আৰু ইংৰাজীত ছপোৱা হৈছে। পৰীক্ষাৰ্থী সকলে ইয়াৰ যি কোনো 50 টা প্ৰশ্নৰ উত্তৰ কৰিব লাগিব। যদি কোনো পৰীক্ষাৰ্থীয়ে 50 তাতকৈ অধিক প্ৰশ্নৰ উত্তৰ কৰে তেন্তে প্ৰথমৰ পৰা 50 টা প্ৰশ্নৰ উত্তৰৰ হে মান দিয়া হ'ব।
2. OMR পৃষ্ঠাত তোমাৰ উপাদানবোৰ কেৱল **নীলা/ক'লা** কলমেৰে পূৰণ কৰিবা।
3. মাৰ্কিঙৰ বাবে কেৱল নীলা/ক'লা চিয়াহীৰ কলম ব্যৱহাৰ কৰিবা।
4. টেস্ট বুকলেটৰ ক'ড **A**। OMR পৃষ্ঠাত ক'ড একে ছপোৱা হৈছেনে তাৰ প্ৰতি নিশ্চিত হ'বা। তাৰোপৰি নিশ্চিত হ'বা যে তোমাৰ টেস্ট বুকলেটৰ নম্বৰ আৰু OMR পৃষ্ঠাত নম্বৰ একে আছেনে নাই। যদি ইয়াত ভিন্নতা থাকে তেন্তে বিষয়টো ইনভিজিউলেটৰ তৎক্ষণাত জনাব লাগিব আৰু টেস্ট বুকলেট, OMR পৃষ্ঠাত সলনি কৰি ল'ব লাগিব। পৰীক্ষা আৰম্ভ হোৱাৰ পাঁচ মিনিট পাছত এই বিষয়ত কোনো দাবী আপত্তি নাথাকিব।
5. প্ৰশ্ন এটেম্ভ কৰাৰ আগতে চাব লাগিব যে বুকলেটখনত মুঠ পৃষ্ঠা 28 আৰু OMR উত্তৰ পৃষ্ঠাবোৰ একে পৃষ্ঠাযুক্ত আছেনে নাই। পৰীক্ষাৰ্থীজনক উপদেশ দিয়া হয় যাতে পৰীক্ষা আৰম্ভ হোৱাৰ ঠিক পাঁচ মিনিটৰ ভিতৰত লক্ষ্য কৰে টেস্ট বুকলেট আৰু OMR পৃষ্ঠা ঠিকমতে ছপোৱা হৈছে নে নাই আৰু কোনো পৃষ্ঠা ক্ষতি হৈছে নেকি?
6. প্ৰতিটো প্ৰশ্নৰ উত্তৰ চাৰিটা বিকল্প আছে। এই চাৰিটা বিকল্পৰ **অতি উত্তম বিকল্পটো** বাছনি কৰি OMR উত্তৰ পত্ৰিকাৰ নীলা/ক'লা কলমেৰে dark কৰিবা।
7. প্ৰতিটো শুদ্ধ উত্তৰৰ বাবে (5) নম্বৰ প্ৰদান কৰা হ'ব। প্ৰতিটো অশুদ্ধ উত্তৰৰ বাবে (1) নম্বৰ কৰ্তন কৰা হ'ব। যদি এটাতকৈ বেছি বৃত্ত dark কৰা থাকে তেন্তে তেনে প্ৰশ্নৰ উত্তৰ ভুল বুলি বিবেচনা কৰা হ'ব আৰু উত্তৰ নকৰা প্ৰশ্নত কোনো নম্বৰ দিয়া নহ'ব।

কু.প.প.

Name of the Candidate (in Capital Letters) : _____

পৰীক্ষাৰ্থীৰ নাম (ডাঙৰ হাতৰ আখৰত) :

Application Number (in figures) : _____

আবেদনৰ নম্বৰ (figuresত) :

Roll Number (in figures) : _____

ৰোল নম্বৰ (figuresত) :

Centre of Examination (in Capital Letters) : _____

পৰীক্ষা কেন্দ্ৰৰ নাম (ডাঙৰ হাতৰ আখৰত) :

Candidate's Signature : _____ Invigilator's Signature : _____

পৰীক্ষাৰ্থীৰ চহী :

ইনভিজিউলেটৰ চহী :

Facsimile signature stamp of Centre Superintendent : _____

কেন্দ্ৰ অধীক্ষক Facsimile stamp চহী :

Merit Zone

1. Simplify : $24 \div 4 \times 2 + 8 - 4 = ?$
(1) 1 (2) 7 (3) 16 (4) 56
2. The difference of the greatest and the smallest of the fractions $\frac{1}{2}, \frac{8}{11}, \frac{7}{8}, \frac{7}{9}, \frac{5}{6}$ is :
(1) $\frac{3}{8}$ (2) $\frac{6}{7}$ (3) $\frac{7}{9}$ (4) $\frac{1}{3}$
3. The sum of LCM and HCF of two numbers is 854. If the LCM is 60 times the HCF and one of the numbers is 70, then the other number is
(1) 160 (2) 164 (3) 168 (4) 172
4. The present age of Harish is 8 times the sum of the ages of his two sons at present. After 8 years, his age will be 2 times the sum of the ages of his two sons. The present age of Harish (in years) is :
(1) 31 (2) 32
(3) 33 (4) 34
5. In an examination, it is required to get 300 marks to pass. A student gets 225 marks and is declared fail by 10% marks. What are the maximum marks of the examination ?
(1) 700 (2) 750
(3) 800 (4) 850
6. In a class of 40 students, ratio of boys and girls is 3 : 2 and the average marks scored by boys is 42 and that by girls is 46. Then the average marks scored by the whole class is :
(1) 43.4 (2) 43.6
(3) 43.8 (4) 44
7. The sum of three numbers is 136. If the ratio between the first number and the second number is 2 : 3 and that between the second and the third number is 5 : 3, then the first number is :
(1) 42 (2) 40
(3) 36 (4) 32

SPACE FOR ROUGH WORK

8. An item is sold for ₹ 504 after allowing 20% discount and still a profit of 5% has been earned. The marked price is how much more than the cost price ?
- (1) ₹ 120 (2) ₹ 135
(3) ₹ 150 (4) ₹ 160
9. A certain sum becomes ₹ 2,356 in 3 years and ₹ 2,660 in 5 years on simple interest. The value of sum is :
- (1) ₹ 1,800 (2) ₹ 1,880 (3) ₹ 1,900 (4) ₹ 1,980
10. In a square, lengths of the diagonals are $(4k + 6)$ cm and $(7k - 3)$ cm. The area of the square (in cm^2) is :
- (1) 144 (2) 162 (3) 169 (4) 172
11. The volume of a cylinder having base radius 3 cm is 396 cm^3 . Find its curved surface area (in cm^2).
(Use $\pi = \frac{22}{7}$)
- (1) 280 (2) 301.5 (3) 264 (4) 320.6
12. A tap can fill a tank in 6 hours. After half the tank is filled, three more similar taps are opened. What is the total time taken to fill the tank completely ?
- (1) 4 hours (2) 5 hours
(3) 3 hours 30 minutes (4) 3 hours 45 minutes
13. A train running at the speed of 80 km/h crosses a 350 m long tunnel in 36 seconds. The length of the train (in m) is
- (1) 350 (2) 380 (3) 420 (4) 450
14. If the mean of 3, 4, 9, $2k$, 10, 8, 6 and $(k + 6)$ is 8, and mode of 2, 2, 3, $2p$, $(2p + 1)$, 4, 4, 5 and 6 (p is a natural number) is 4, then the value of $(k - 2p)$ is :
- (1) 0 (2) 1 (3) 2 (4) 3
15. In triangle ABC, points D and E are on AB and AC respectively such that DE is parallel to BC. If $AD = 6$ cm, $DB = 4$ cm, $AE = 9$ cm, then the length of EC (in cm) is
- (1) 7 (2) 6.4 (3) 6 (4) 5.5

SPACE FOR ROUGH WORK

16. If $\sin A = \frac{4}{5}$, then $(3 - \tan A)(2 + \cos A) =$

- (1) $\frac{12}{5}$ (2) $\frac{13}{3}$ (3) $\frac{13}{5}$ (4) 3

17. A man can row a boat at 8 km/h in still water. If the speed of the water current is 2 km/h and it takes him 2 hours to row to a place and come back, then how far off (in km) is the place ?

- (1) 7.5 (2) 6 (3) 9.5 (4) 10

18. From the given options, which pass connects Jammu with Srinagar ?

- (1) Banihal pass (2) Nathu La pass
(3) Niti pass (4) Rohtang pass

19. Which of the following is **not** correctly matched regarding Padma Awards-2024 ?

- (1) Padma Vibhushan Award → Shri Konidela Chiranjeevi
(2) Padma Shri Award → Mithun Chakraborty
(3) Padma Bhushan Award → M. Fathima Beevi
(4) Padma Bhushan Award → Sitaram Jindal

20. Match List-I with List-II :

List-I Person	List-II Area of work
(A) Vishakhadatta	(I) Medicine
(B) Kartikeya Sarabhai	(II) Poet
(C) Charaka	(III) Environmentalist
(D) Satyendra Nath Bose	(IV) Mathematics

Choose the correct answer from the options given below.

- (1) (A) - (I), (B) - (III), (C) - (IV), (D) - (II)
(2) (A) - (II), (B) - (III), (C) - (I), (D) - (IV)
(3) (A) - (II), (B) - (I), (C) - (III), (D) - (IV)
(4) (A) - (III), (B) - (IV), (C) - (I), (D) - (II)

SPACE FOR ROUGH WORK

21. The following states were formed after 1960. What was the correct sequence of their formation ?

- (A) Haryana (B) Sikkim
(C) Nagaland (D) Goa

Choose the correct answer from the options given below.

- (1) (C), (B), (A), (D) (2) (C), (A), (B), (D)
(3) (C), (D), (A), (B) (4) (D), (C), (A), (B)

22. Out of the given options, which scheme's objective is to conduct an annual survey at the gram panchayat level to monitor the progress in the development process of rural areas ?

- (1) Mission Antyodaya (2022-23) (2) Mission Karmayogi (2022-23)
(3) Mission Rashtriya Gokul (2022-23) (4) Mission Atmanirbhar Bharat (2022-23)

23. Which one of the following countries is *not* a member of the "Quadrilateral Security Dialogue", also known as "QUAD" ?

- (1) China (2) Japan
(3) India (4) Australia

24. Who has become the first woman chairperson of the Railway Board of Indian Railways in 2023 ?

- (1) Jaya Verma Sinha (2) Mita Vashishth
(3) Ravneet Kaur (4) Vasudha Gupta

25. Match List-I with List-II :

List-I Country	List-II Currency
(A) Myanmar	(I) Ruble
(B) Russia	(II) Ngultrum
(C) Malaysia	(III) Kyat
(D) Bhutan	(IV) Ringgit

Choose the correct answer from the options given below.

- (1) (A) - (III), (B) - (I), (C) - (II), (D) - (IV)
(2) (A) - (III), (B) - (I), (C) - (IV), (D) - (II)
(3) (A) - (IV), (B) - (I), (C) - (III), (D) - (II)
(4) (A) - (II), (B) - (I), (C) - (IV), (D) - (III)

SPACE FOR ROUGH WORK

26. "Jhulaghat Suspension Bridge" between India and which country has become fully operational now ?
- (1) Bhutan (2) Nepal
(3) China (4) Myanmar
27. Due to ocean acidification when the ocean becomes more acidic, what happens to the pH level of the ocean ?
- (1) The pH level goes down.
(2) The pH level stays the same.
(3) The pH level goes up.
(4) The pH level becomes zero.
28. Who is the first para-athlete to receive the Padma Bhushan award in India ?
- (1) Bhavina Patel
(2) Devendra Jhajharia
(3) Avani Lekhara
(4) Mariyappan Thangavelu
29. Zemu Glacier is located in which state of India ?
- (1) Uttarakhand (2) Himachal Pradesh
(3) Sikkim (4) Arunachal Pradesh
30. Who among the following is Chile's first woman President ?
- (1) Mary Robinson
(2) Michelle Bachelet
(3) Kim Campbell
(4) Jennifer Shipley
31. Which organisation developed and launched 'Ugram' Indigenous Assault Rifle for the armed forces ?
- (1) ISRO (2) BEL
(3) HAL (4) DRDO
32. Which of the following substances is a bad conductor of electricity ?
- (1) Diamond (2) Gold (3) Silver (4) Graphite

SPACE FOR ROUGH WORK

33. Which of the following disease is caused due to the deficiency of proteins ?

- (1) Arthritis (2) Kwashiorkor
(3) Goitre (4) Night Blindness

34. Match List-I with List-II :

List-I Navy (Institution)	List-II Place
(A) INS Chilka	(I) Goa
(B) INS Hansa	(II) Andhra Pradesh
(C) INS Satavahana	(III) Kerala
(D) INS Garuda	(IV) Odisha

Choose the correct answer from the options given below.

- (1) (A) - (III), (B) - (I), (C) - (II), (D) - (IV)
(2) (A) - (I), (B) - (IV), (C) - (II), (D) - (III)
(3) (A) - (IV), (B) - (I), (C) - (III), (D) - (II)
(4) (A) - (IV), (B) - (I), (C) - (II), (D) - (III)

35. DRDO has conducted the first successful flight test of Agni-5 missile equipped with MIRV technology. What is the full form of MIRV ?

- (1) Multiple Independently Targetable Re-Entry Vehicle
(2) Mission India Target Re-Entry Vehicle
(3) Multiple Independently Technology Re-Entry Vehicle
(4) Multiple Indirect Targetable Re-Entry vehicle

36. Which Indian has won the "Ramon Magsaysay Award-2023" ?

- (1) Korvi Rakshand
(2) Ashwini Kumar
(3) Dipti Ranjan Sahoo
(4) Dr. Ravi Kannan R.

SPACE FOR ROUGH WORK

37. Who has been appointed the Chairman of the 16th Finance Commission of India ?

- (1) Ajay Narayan Jha
- (2) Smt. Annie George Mathew
- (3) Pradip Kumar Mohanty
- (4) Dr. Arvind Panagariya

38. Sri Ranganathswamy Temple which is situated in Tamil Nadu, is dedicated to which deity ?

- (1) Lord Shiva
- (2) Lord Vishnu
- (3) Goddess Durga
- (4) Goddess Lakshmi

39. The Election Commission of India gets the power to conduct elections from which of the following articles ?

- | | |
|-----------------|-----------------|
| (1) Article 324 | (2) Article 280 |
| (3) Article 264 | (4) Article 26 |

40. Match List-I with List-II :

List-I Centre of Handicraft	List-II State
(A) Mon	(I) Arunachal Pradesh
(B) Nalbari	(II) Assam
(C) Pasighat	(III) Meghalaya
(D) Tura	(IV) Nagaland

Choose the correct answer from the options given below.

- (1) (A) - (IV), (B) - (II), (C) - (I), (D) - (III)
- (2) (A) - (I), (B) - (III), (C) - (IV), (D) - (II)
- (3) (A) - (IV), (B) - (III), (C) - (I), (D) - (II)
- (4) (A) - (I), (B) - (II), (C) - (IV), (D) - (III)

SPACE FOR ROUGH WORK

41. In which state is “Amchang Wildlife Sanctuary” located ?
- (1) Assam (2) Rajasthan
(3) Odisha (4) Manipur
42. India’s first 3D-printed Post Office has been inaugurated in :
- (1) Guwahati (2) Kolkata
(3) Mumbai (4) Bengaluru
43. What should come in the place of the question mark (?) in the following alphanumeric series ?
- A1X, B4P, E25J, J100F, ?
- (1) O289D (2) O225E
(3) Q289D (4) Q225E
44. In the given analogy, choose the word which will replace the question mark :
- NEGI : MVTR :: SING : ?
- (1) TRNS (2) TRNT
(3) FRMT (4) HRMT
45. In a certain code language ‘ki ru pi’ means ‘nobody like cruel’, ‘ki mi cha’ means ‘king was cruel’ and ‘ru pi cha’ means ‘nobody like king’. What is the code for ‘was’ in the given code language ?
- (1) ki (2) mi
(3) cha (4) ru
46. Read the following information carefully to choose the best option for the question :
- ‘P % Q’ means that ‘P is the sister of Q’
‘P + Q’ means that ‘P is the son of Q’
‘P × Q’ means that ‘P is the husband of Q’
‘P – Q’ means that ‘P is the brother of Q’
- Which of the following means ‘A is the son-in-law of G’ ?
- (1) $A \times U + S \times G$ (2) $A + S \% U \times G$
(3) $A - S + U \times G$ (4) $A \times U \% S + G$

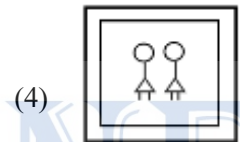
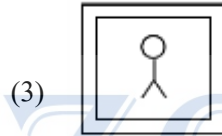
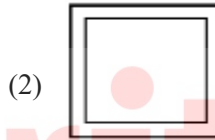
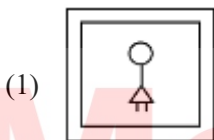

SPACE FOR ROUGH WORK

47. If 26th January, 2020 was a Sunday, then what day of the week was it on 16th March of that year ?
- (1) Sunday (2) Monday
(3) Tuesday (4) Wednesday
48. What will be the measurement of the angle made by the hour and minute hands of a clock when the time is 'quarter past 3' ?
- (1) $6\frac{1}{2}^\circ$ (2) 10°
(3) $7\frac{1}{2}^\circ$ (4) $8\frac{1}{2}^\circ$
49. If in a certain code language, 'MERCURY' is coded as 'NGUGZXF', then how will 'ENTANGLE' be coded in the same code language ?
- (1) FPXFSMSM (2) FPWESMSM
(3) FPWESNSN (4) FPWFTNSM
50. The problem given below consists of a question and two statements numbered I and II. You have to decide whether the data provided in the statements are sufficient to answer the question.
- How many sisters does Sunny have ?
- I. Sunny is the only son of his parents.
II. Sunny's parents have three children.
- (1) Only statement I alone is sufficient to answer the question.
(2) Only statement II alone is sufficient to answer the question.
(3) Statements I and II together are sufficient to answer the question.
(4) Either statement I or II alone is sufficient to answer the question.
51. A boy leaves his house. He travels 6 km towards South, then travels 8 km towards West and further travels 9 km towards South. How far and in which direction is he from his house now ?
- (1) 13 km, South West
(2) 17 km, South West
(3) 17 km, North West
(4) 13 km, West

SPACE FOR ROUGH WORK

52. Find out which of the answer figures completes the figure matrix :

Problem figure :



53. A clock seen through a mirror shows 'quarter to seven'. What is the correct time shown by the clock ?

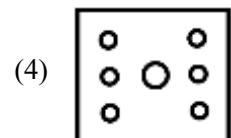
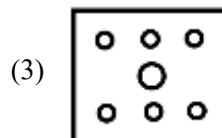
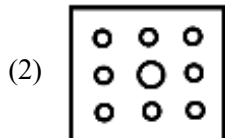
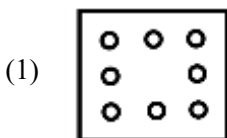
(1) 6:15

(2) 6:17

(3) 5:17

(4) 5:15

54. The sequence of folding a piece of paper and the manner in which the folded paper has been cut is shown in the following figures. How would this paper look when unfolded ?



SPACE FOR ROUGH WORK

55. Find out the missing (?) number and letter.

A	C	?	44	C	F
	80			31	
	5			20	
?		8	13		E
	G				I

- (1) 59 and K
- (2) 61 and L
- (3) 61 and K
- (4) 59 and L

56. What will be the next number of the series

3, 6, 10.5, 17, 26, ?

- (1) 31
- (2) 38
- (3) 40
- (4) 41

57. In a class of 40 students, Anjali's rank is thrice that of Anita. There are 4 students who have ranks worse than that of Anjali. Anita's rank in the class is :

- (1) 9th
- (2) 10th
- (3) 18th
- (4) 12th

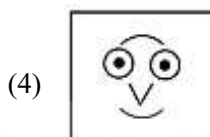
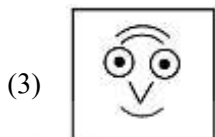
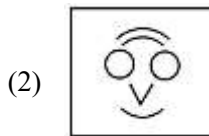
58. Six people E, H, K, M, S and U are seated in a circle facing the centre. U and H are immediate neighbours of M. E is the only person sitting between K and S. H is to the immediate right of S. Who is to the immediate right of U ?

- (1) M
- (2) E
- (3) K
- (4) S

SPACE FOR ROUGH WORK

59. Find out which of the answer figures from the options can be formed using all the pieces given in the problem figure.

Problem figure



60. Read the given statements and conclusions carefully assuming that the information given in the statements is true, even if it appears to be at variance with commonly known facts. Decide which of the given conclusion(s) logically follows from the statements.

Statements :

No keyboard is a mouse.

All mice are computers.

All computers are laptops.

Conclusions :

I. All mice are laptops.

II. All computers can never be keyboards.

- (1) Only conclusion I follows
 (2) Only conclusion II follows
 (3) Neither conclusion I nor II follows
 (4) Both conclusions I and II follow

SPACE FOR ROUGH WORK

Read carefully the following instructions :

8. No candidate will be allowed to leave the OMR Answer Sheet blank. If any OMR Answer Sheet is found blank, it shall be crossed by the Invigilator with his/her signature, mentioning "Cancelled" on it.
9. Do not tear or fold any page of the Test Booklet and OMR Answer Sheet.
10. Candidates are advised to ensure that they fill the correct particulars on the OMR Answer Sheet, i.e., Application No., Roll No., Test Booklet No., Name, Mother's Name, Father's Name and Signature.
11. In case of any discrepancy in any question between English and Hindi/Regional language version, the English version will be considered as the final version for evaluation.
12. Rough work is to be done in the space provided for this purpose in the Test Booklet only.
13. The answers will be evaluated through electronic scanning process. Incomplete or incorrect entries may render the OMR Answer Sheet invalid.
14. Candidates are advised not to fold or make any stray marks on the OMR Answer Sheet. Use of Eraser, Nail, Blade, White Fluid/Whitener, etc., to smudge, scratch or damage in any manner the OMR Answer Sheet during examination is strictly prohibited. Candidature and OMR Answer Sheet of candidates using Eraser, Nail, Blade or White Fluid/Whitener to smudge, scratch or damage in any manner shall be cancelled.
15. There will be one copy of OMR Answer Sheet i.e., the Original Copy. After the examination is over, the candidate shall hand over the OMR Answer Sheet to the Invigilator. The candidate can take away the Test Booklet after the examination is over. If the candidate does not hand over the OMR Answer Sheet to the Invigilator and goes away with the OMR Answer Sheet, his/her candidature shall be cancelled and criminal proceedings shall also be initiated against him/her.
16. Candidates are advised strictly not to carry handkerchief, any mobile phone, any type of watch, belt or wear ornaments like ring, chain, ear-ring, etc., electronic or communication device, pen, pencil, eraser, sharpener and correction fluid to the Examination Centre. If any candidate is found possessing any such item, he/she will not be allowed to enter the examination centre. Possession of a mobile phone or any other aiding material as mentioned above by the candidate in the examination room will be treated as a serious violation and it may lead to cancellation of the candidature and debarring him/her from future examinations.
17. If a candidate violates any instructions or shows any indiscipline or misbehaviour, appropriate action will be taken including cancellation of candidature and debarring from future examinations.
18. Use of electronic/manual calculator is **not** allowed.

নির্দেশনাসমূহ গুরুত্বসহকাৰে পঢ়ি লওঁক :

8. কোনো পৰীক্ষার্থীয়ে OMR উত্তৰ পত্ৰিকা খালী এৰিব নোৱাৰিব। যদি কোনো উত্তৰ পত্ৰিকা খালী দেখা যায় নিৰীক্ষকে উক্ত পত্ৰিকাখন নিৰীক্ষণ কৰি নিজৰ হস্তাক্ষৰসহ পত্ৰিকাখন বাতিল কৰিব।
9. কোনো পৰীক্ষার্থীয়ে OMR উত্তৰ পত্ৰিকাখন ছিগা/কটা/ভাঁজ দিয়া কাৰ্য নকৰিব।
10. পৰীক্ষার্থীয়ে যাতে OMR উত্তৰ পত্ৰিকা নিজৰ সঠিক তথ্যৰে ভৰ্তি কৰে, যেনে, আবেদনপত্ৰ সংখ্যা (এপ্লিকেশ্বন নং) ক্ৰমাংক (ৰোল নম্বৰ), পৰীক্ষা পুস্তিকা সংখ্যা, নাম, মাতৃৰ নাম, পিতৃৰ নাম আৰু হস্তাক্ষৰ।
11. যদিহে প্ৰশ্নটোত ইংৰাজী আৰু আঞ্চলিক ভাষাৰ মাজত বিসংগতি দেখা যায় তেনেহ'লে ইংৰাজীত থকা প্ৰশ্নটোক প্ৰাধান্য দি মূল্যাংকনৰ বাবে বিবেচিত কৰা হ'ব।
12. খুচুৰা (Rough) কামৰ বাবে প্ৰশ্ন পুস্তিকাত দিয়া নিৰ্ধাৰিত ঠাইহে ব্যৱহাৰ কৰিব।
13. উত্তৰসমূহ বৈদ্যুতিক স্কেনিং প্ৰক্ৰিয়াৰে (electronic scanning process) মূল্যাংকন কৰা হ'ব। অসম্পূৰ্ণ অথবা অশুদ্ধ তথ্যই OMR উত্তৰ পত্ৰিকাক অনুপযুক্ত হিচাপে বিবেচিত কৰিব (বাতিল কৰিব)।
14. পৰীক্ষার্থীসকলক জনোৱা যায় যে OMR উত্তৰ পত্ৰিকাত যিকোনো ভাঁজ অথবা চিহ্ন দিয়াটো নিয়ম বৰ্হিভূত। পৰীক্ষাৰ সময়ত OMR উত্তৰ পত্ৰিকাত দাগ লগোৱা বা লেতেৰা কৰা বা ক্ষতি কৰা যিকোনো সজুলি যেনে বৰব (ইৰেজাৰ), নখ, ব্লেড, ৱাইটনাৰ ইত্যাদিৰ ব্যৱহাৰ নিষিদ্ধ। কোনো পৰীক্ষার্থীয়ে যদি বৰব, নখ, ব্লেড ইত্যাদি ব্যৱহাৰ কৰে তেন্তে তেওঁৰ পৰীক্ষার্থী হোৱাৰ যোগ্যতা বাতিল হিচাপে বিবেচিত হ'ব।
15. অৰিজিনেল OMR খনেই OMR উত্তৰ পত্ৰিকাৰ একমাত্ৰ কপি। পৰীক্ষাৰ অন্তত পৰীক্ষার্থীয়ে OMR উত্তৰ পত্ৰিকাখন নিৰীক্ষকৰ হাতত জমা দিব। পৰীক্ষাৰ শেষত পৰীক্ষার্থীয়ে প্ৰশ্ন পুস্তিকাখন নিজৰ সতে কঢ়িয়াব পাৰিব। যদিহে কোনো পৰীক্ষার্থীয়ে OMR উত্তৰ পত্ৰিকাখন নিৰীক্ষকৰ হাতত জমা নিদি নিজৰ সৈতে লৈ পৰীক্ষাগৃহ ত্যাগ কৰিব খোজে তেন্তে সেই পৰীক্ষার্থীৰ পৰীক্ষার্থী হোৱাৰ যোগ্যতা বাতিল কৰা হ'ব আৰু তেওঁৰ বিৰুদ্ধে আইনী ব্যৱস্থা গ্ৰহণ কৰা হ'ব।
16. পৰীক্ষার্থীসকলক জনোৱা হয় যে নিম্নলিখিত বস্তুসমূহ পৰীক্ষাগৃহত অনুমতি দিয়া নহয়। যেনে, কমাল, মোবাইল ফোন, যিকোনো ধৰণৰ ঘড়ী, বেল্ট, গহনা যেনে আঙুঠি, চেইন, কাণফুলি, বৈদ্যুতিক বা যোগাযোগৰ আহিলা, কলম, পেঞ্চিল, বৰব, স্থাৰ্পনাৰ, ৱাইটনাৰ ইত্যাদি। পৰীক্ষার্থীৰ ওচৰত এইসমূহৰ যিকোনো এবিধ বস্তু থাকিলেও তেওঁক পৰীক্ষা কেন্দ্ৰত প্ৰৱেশৰ অনুমতি দিয়া নহ'ব। পৰীক্ষা গৃহত পৰীক্ষার্থীস সৈতে মোবাইল ফোন অথবা ওপৰোক্ত যিকোনো বস্তু পোৱা গ'লে তাক গস্তীৰ উলংঘন হিচাপে বিবেচনা কৰা হ'ব। এয়াই পৰীক্ষার্থীৰ যোগ্যতা বাতিল অথবা ভৱিষ্যতেও যোগ্যতা বাতিলৰ নিচিনা কঠোৰ পৰিস্থিতিলৈ লৈ যাব পাৰে।
17. যদি এগৰাকী পৰীক্ষার্থীয়ে কোনো নিৰ্দেশনাৰ উলংঘন কৰে, শৃংখল ভংগ কৰে অথবা অভদ্ৰ আচৰণ দেখুৱায়, তেওঁৰ বিৰুদ্ধে বিহিত ব্যৱস্থা গ্ৰহণ কৰা হ'ব যাৰ বিতৰত ভৱিষ্যত আৰু বৰ্তমানত পৰীক্ষার্থীৰ যোগ্যতা বাতিলো অন্তৰ্ভুক্ত।
18. বৈদ্যুতিক অথবা মেনুৱেল কেলকুলেটৰ (গগনা যন্ত্ৰ) ব্যৱহাৰ কৰা **নিষেধ**।